

Roll No.

41203

B. Sc. (Pass Course) 4th Semester Examination – May, 2019

CHEMISTRY-III (ORGANIC CHEMISTRY)

Paper : CH-403

Time : Three Hours [Maximum Marks : 29

Before answering the questions, candidates should ensure that they have been supplied the correct and complete question paper. No complaint in this regard, will be entertained after examination.

Note : Attempt five questions in all, selecting one question from each Unit. Question number 1 is Compulsory and is of five marks. All other questions are of six marks.

Compulsory Question

- 1. (a) Draw a typical IR spectrum and specify functional group, finger print and aromatic regions.
(b) Draw the structure of ammonia and specify bond angle, bond distance and hybridization.
(c) Write down the examples of aromatic and aliphatic diazonium chlorides. Out of these two, which one is more stable ?

P. T. O.

41203

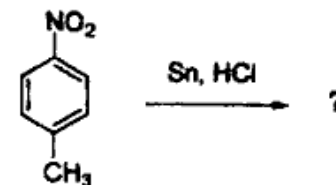
- (d) Write down the structure of vanillin.
(e) How will you determine whether the given compound is aldehyde or ketone ? 1 x 5 = 5

UNIT - I

- 2. (a) An alkyne with MF C5H8 show IR bands at 3300 and 2110 cm-1. Assign the structure of alkyne.
(b) Give approximate positions of the characteristic IR bands in the following compounds : 3 x 2 = 6
(i) CH3CH2CH2OH
(ii) CH3COCH3
(iii) CH2 = CHCOCH3
3. (a) What important bands do you expect in IR spectrum of toluene ?
(b) Write down the principle of IR spectroscopy. Also mention the source of IR radiation. 3 x 2 = 6

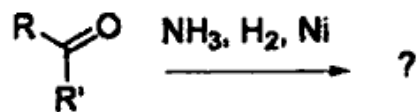
UNIT - II

- 4. (a) Complete the following reaction sequence :



(2)

(b) Write down the mechanism of following reaction

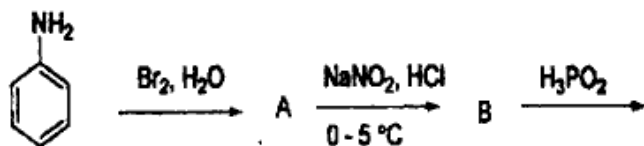


5. (a) How will you separate primary, secondary and tertiary amines by Hofmann's method ?

(b) Why boiling point of aniline is higher than toluene ? Explain.

UNIT - III

6. (a) Complete the following reaction sequence :



(b) Write down a short note on Bantz-Schiemann reaction.

7. (a) How will you prepare nitro methane by phase nitration ?

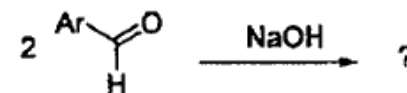
(b) Reduce nitro benzene in acidic medium. Write the reaction with mechanism.

41203

UNIT - IV

8. (a) Discuss the similar properties of aromatic and aliphatic aldehydes.

(b) Complete the following reaction with mechanism :



3 × 2 = 6

9. (a) How will you convert cyclohexanone to cyclohexanol with aluminium isopropoxide in isopropyl alcohol ? Explain with mechanism.

(b) Write a short note on Wittig reaction. 3 × 2 = 6